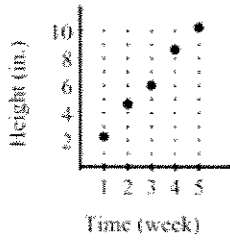
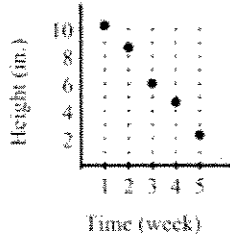


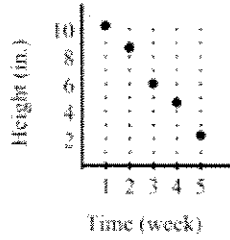
- a. The height of the plant increases over time.



- b. The height of the plant decreases over time.



- c. The height of the plant increases over time.



- d. The height of the plant decreases over time.

